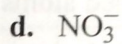
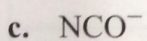
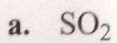


◆ Learning Exercise 10.1D

Draw two or more resonance structures for each of the following:



*Answers*

